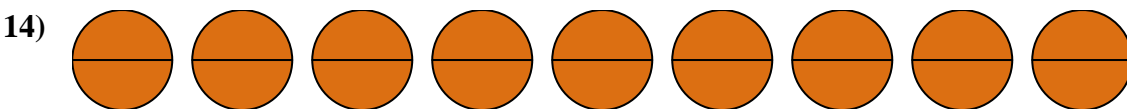
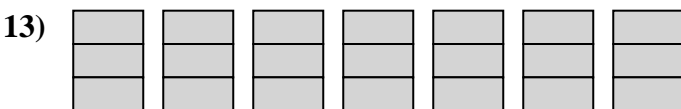
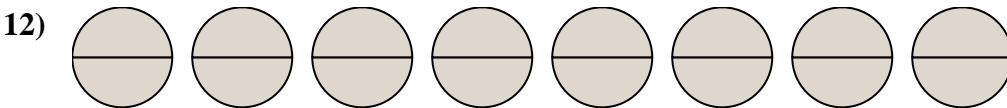
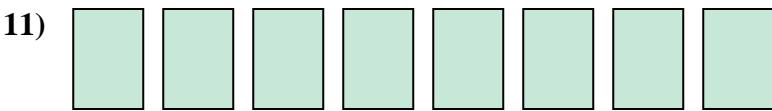
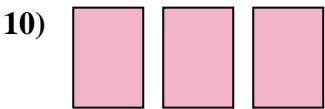
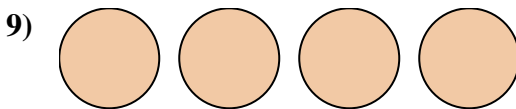
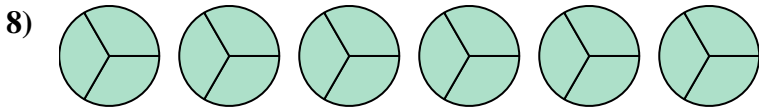
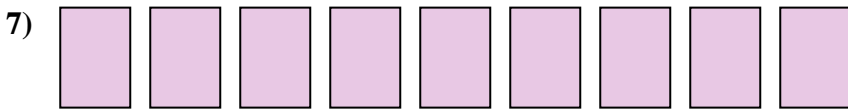
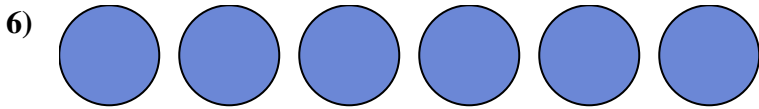
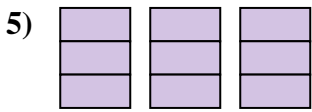

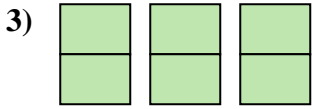
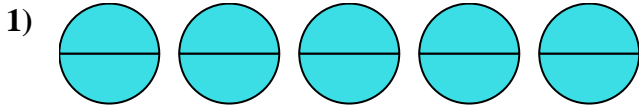




Write the shaded amount as a fraction.



Answers

1. _____

2. _____

3. _____

4. _____

5. _____

6. _____

7. _____

8. _____

9. _____

10. _____

11. _____

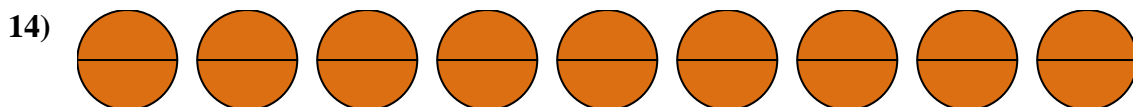
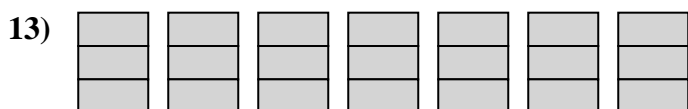
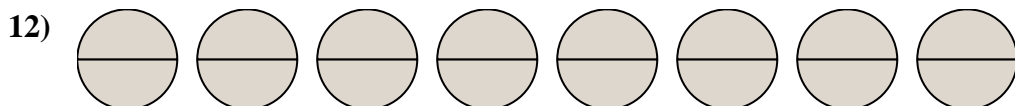

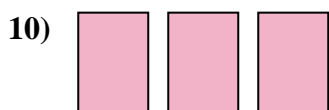
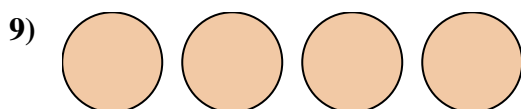
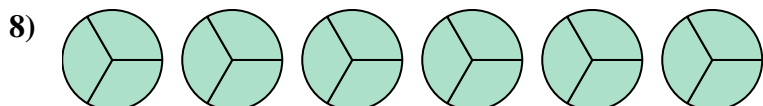
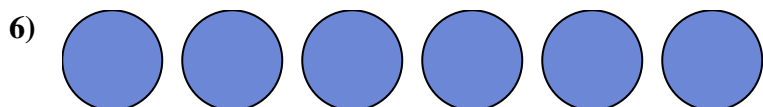
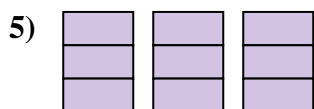
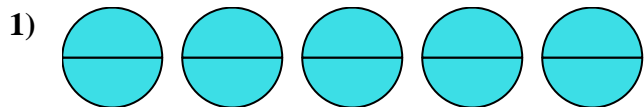
12. _____

13. _____

14. _____



Write the shaded amount as a fraction.



Answers

1. $\frac{10}{2}$

2. $\frac{5}{1}$

3. $\frac{6}{2}$

4. $\frac{24}{3}$

5. $\frac{9}{3}$

6. $\frac{6}{1}$

7. $\frac{9}{1}$

8. $\frac{18}{3}$

9. $\frac{4}{1}$

10. $\frac{3}{1}$

11. $\frac{8}{1}$

12. $\frac{16}{2}$

13. $\frac{21}{3}$

14. $\frac{18}{2}$